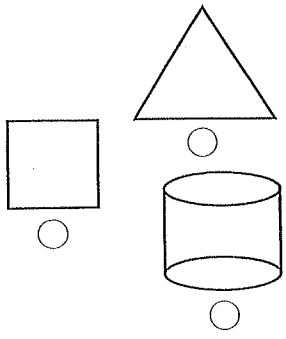


Name _____

In 257, what numeral is in the tens place? _____

Which object is a 3-D shape?



Bill found 8 shells on the beach. His sister found 6. How many shells did the two children find altogether?

8 + 4 =

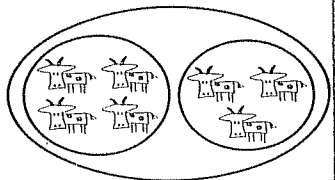
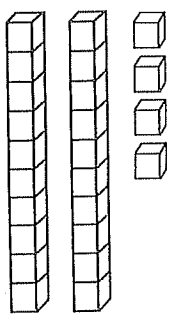
9 + 7 =

5 + 5 =

7 + 6 =

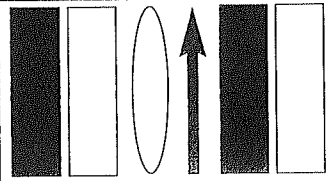
Day # 1

What number is shown? _____



Write a number sentence to tell about the picture.

Jan earned 5 nickels on Friday and 7 dimes on Monday. How much money does she have? _____



Draw the next two shapes in the pattern.


Day # 2

35 74

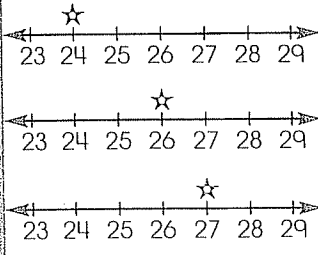
Which number is between 35 and 74?

- 34
- 63
- 81

About how many blocks tall is the flower? _____



Circle the number line that stars an even number greater than 25.



11 - 4 =

15 - 7 =

14 - 8 =

18 - 9 =

Day # 3

Players	Goals Scored
Roy	5 goals
Jim	7 goals
Zak	3 goals

Who scored the fewest goals?

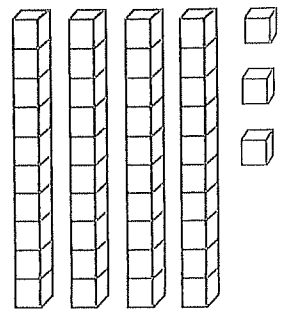
Who scored the most goals?

Jen planted 2 rows with 4 flowers in each row. Then she planted 1 row with 5 flowers in it. How many flowers did she plant? _____

About how long would it take an adult to run a mile?

- 4 hours
- 2 days
- 1 hour
- 10 minutes

What number is shown? _____



Day # 4